





























Name: \_\_\_\_\_ Date: \_\_\_\_\_ Period: \_\_\_\_\_ Due: October 7

For each day this month, observe the moon, add the date and time you observed the moon. Draw the phase. You will turn this in for a project grade.

 Date: _____ Phase: _____	 Date: _____ Phase: _____	 Date: _____ Phase: _____	 Date: _____ Phase: _____	 Date: _____ Phase: _____	 Date: _____ Phase: _____	 Date: _____ Phase: _____
 Date: _____ Phase: _____	 Date: _____ Phase: _____	 Date: _____ Phase: _____	 Date: _____ Phase: _____	 Date: _____ Phase: _____	 Date: _____ Phase: _____	 Date: _____ Phase: _____
 Date: _____ Phase: _____	 Date: _____ Phase: _____	 Date: _____ Phase: _____	 Date: _____ Phase: _____	 Date: _____ Phase: _____	 Date: _____ Phase: _____	 Date: _____ Phase: _____
 Date: _____ Phase: _____	 Date: _____ Phase: _____	 Date: _____ Phase: _____	 Date: _____ Phase: _____	 Date: _____ Phase: _____	 Date: _____ Phase: _____	 Date: _____ Phase: _____